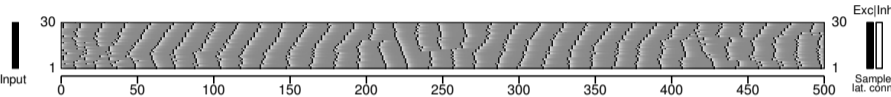
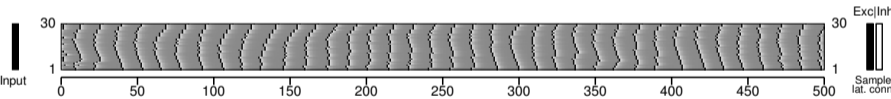


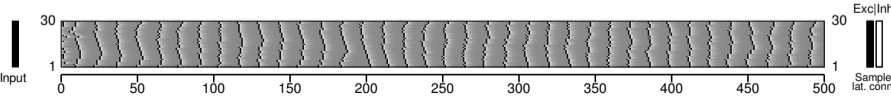
(a) $\gamma_E = 0.06$



(b) $\gamma_E = 0.12$



(c) $\gamma_E = 0.24$



(d) $\gamma_E = 0.48$